







Chapter 3 Worksheet Answers

Note Duration

Total:
/10

Q.s. 1-5. Fill in the missing note values:

NOTE SYMBOL	NOTE LENGTH
	4 beats
	2 beats
	1 beat
	1/2 beat
	1/4 beat
	1/8 beat

How many beats is each of the following notes worth:



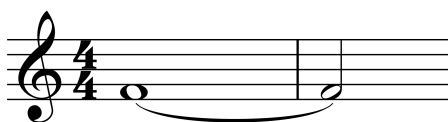
6. 3 beats

7. 1½ beats

8. ¾ beat

9. 6 beats.

How many beats is the following worth:



10. 6 beats