







Chapter 3 Worksheet

Note Duration

| |
|--------|
| Total: |
| /10 |

Q.s. 1-5. Fill in the missing note values:

| NOTE SYMBOL | NOTE LENGTH |
|--|-------------|
|  | |
|  | |
|  | 1 beat |
|  | |
|  | |
|  | |

How many beats is each of the following notes worth:



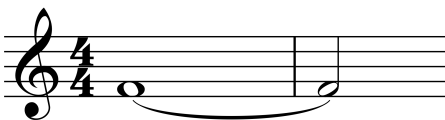
6.

7.

8.

9.

How many beats is the following worth:



10.