









# Chapter 1 Worksheet Answers





## 1. Treble Clef Notes





Total score:
/15

Write the note name under each note

1	2	3	4
			
e.g. <u>E</u>	<u>D</u>	<u>A</u>	<u>G</u>

5	6	7	8
			
<u>C</u>	<u>B</u>	<u>D</u>	<u>F</u>

9	10	11	12
			
<u>B</u>	<u>A</u>	<u>C</u>	<u>A</u>

13	14	15	16
			
<u>G#</u>	<u>C#</u>	<u>D#</u>	<u>F#</u>